

Name : _____

Score : _____

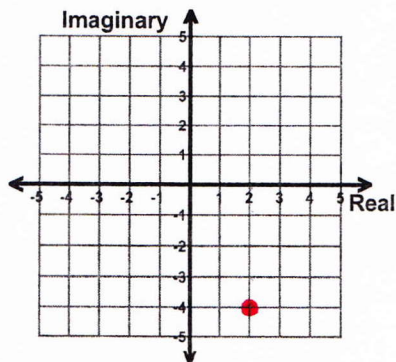
Teacher : _____

Date : _____

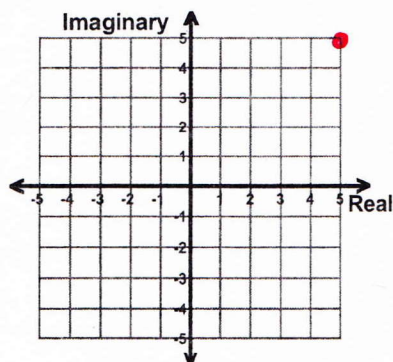
Graphing and Writing Complex Numbers

For 1-3: Graph the given complex number. For 4-6: Find the complex number graphed.

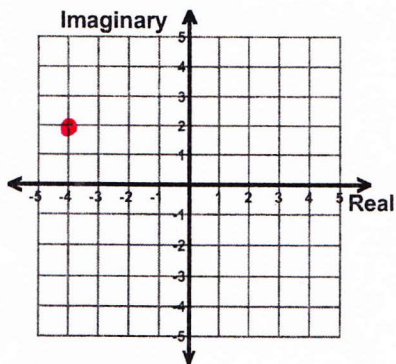
1) $2 - 4i$



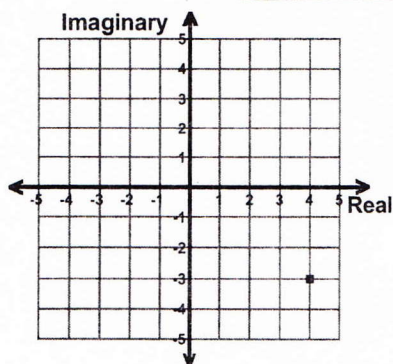
2) $5 + 5i$



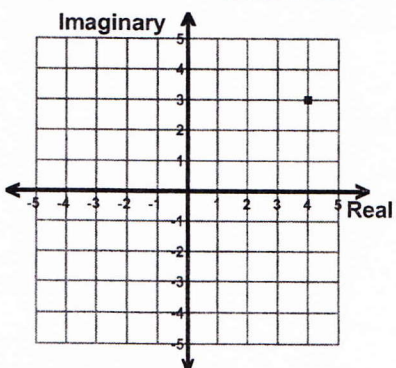
3) $-4 + 2i$



4) ANSWER: $4 - 3i$



5) ANSWER: $4 + 3i$



6) ANSWER: $1 + 3i$

