

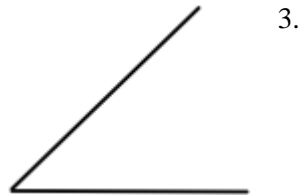
Name _____ Date _____ Period _____

Constructions Worksheet



Use a compass and straightedge to copy the following segments.



Use a compass and straightedge to copy the following angles.



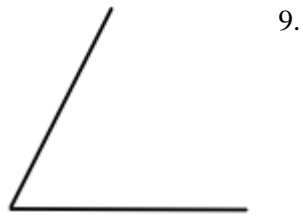
Use a compass and straightedge to bisect the following segments (find the midpoint).



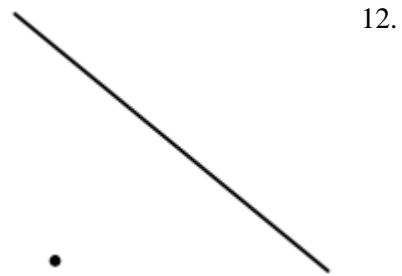
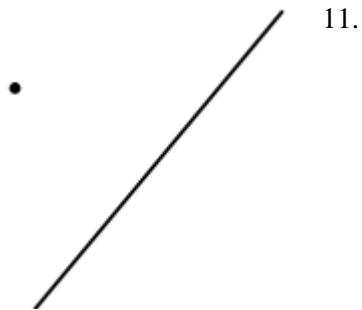
Use a compass and straightedge to construct the perpendicular bisector of the following segments.



Use a compass and straightedge to bisect the following angles.



Use a compass and straightedge to construct a segment that is parallel to the given segment and goes through the given point.



Use a compass and straightedge to construct a segment that is perpendicular to the given segment and goes through the given point.

