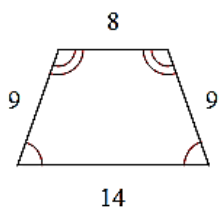
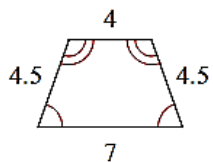
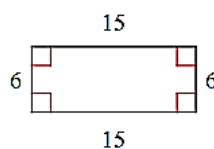
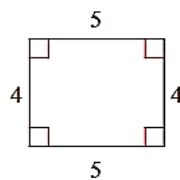


Determine if the polygons are similar.

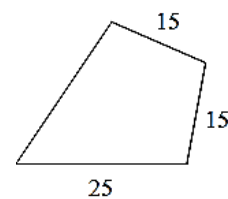
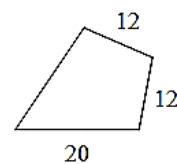
1.



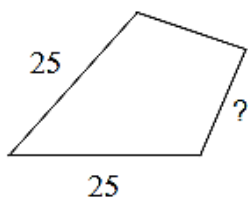
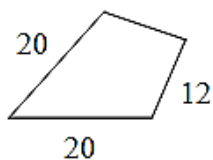
2.



3. Determine the ratio from the small polygon to the large polygon.



4. Solve for the missing side.



5. Solve for x.

