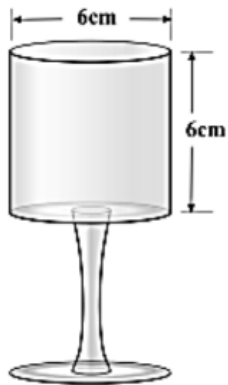
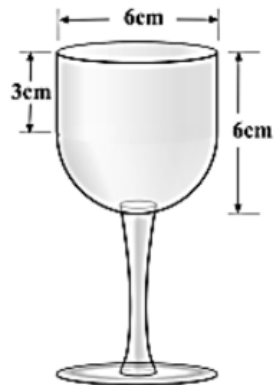


WARM-UP: Find the volume of each glass. Which of the following holds the most liquid?

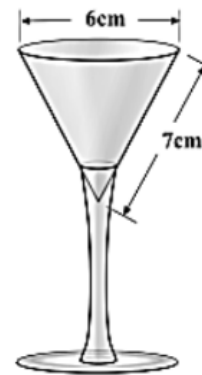
Glass 1



Glass 2

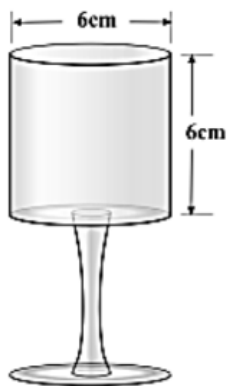


Glass 3

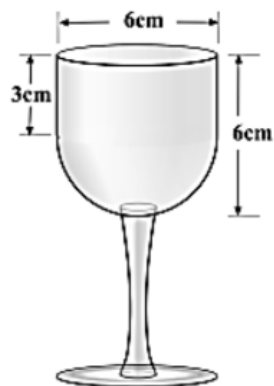


WARM-UP: Find the volume of each glass. Which of the following holds the most liquid?

Glass 1



Glass 2



Glass 3

